

Name: \_\_\_\_\_

Date: \_\_\_\_\_






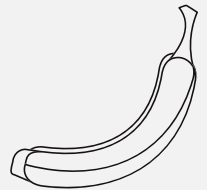





# IS IT MORE OR LESS?

LEARN THE CONCEPT OF MORE AND LESS.

## SWEETS OR FRUIT?

### INSTRUCTIONS:

COUNT TO SEE WHICH HAS MORE, THE FRUIT OR THE SWEETS. COLOR THE ONE THAT HAS MORE WITH A RED CRAYON, AND THE ONE WITH LESS WITH A YELLOW.



Name: \_\_\_\_\_

Date: \_\_\_\_\_

# ADDITION PRACTICE

COMPLETE THE ADDITION PROBLEMS BELOW AND WRITE  
THE ANSWER BENEATH

$1 + 1 =$

$2 + 1 =$

$1 + 2 =$

$2 + 2 =$

$1 + 3 =$

$2 + 3 =$

$1 + 4 =$

$2 + 4 =$

$1 + 5 =$

$2 + 5 =$

$1 + 6 =$

$2 + 6 =$

$1 + 7 =$

$2 + 7 =$

$1 + 8 =$

$2 + 8 =$

$1 + 9 =$

$2 + 9 =$

$1 + 10 =$

$2 + 10 =$

Name: \_\_\_\_\_



Date: \_\_\_\_\_

# MATCH LIKE ITEMS

MATCH ITEMS THAT ARE THE SAME

INSTRUCTIONS:

DRAW A LINE FROM THE ITEM ON THE LEFT THAT IS SIMILAR TO OR THE SAME AS THE ITEM ON THE RIGHT.



Name: \_\_\_\_\_

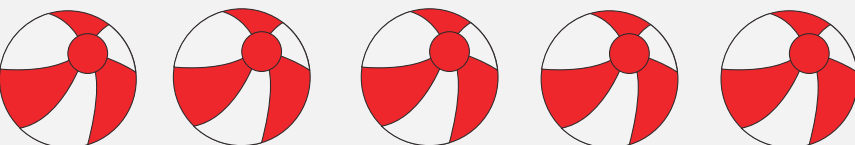
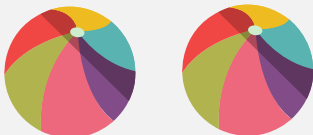

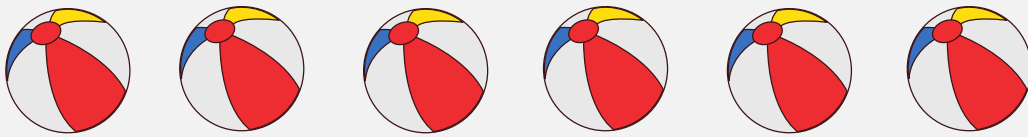
Date: \_\_\_\_\_

# COUNT THE BALLS

## PRACTICE COUNTING THE ROWS OF BEACH BALLS

### INSTRUCTIONS:

COUNT THE NUMBER OF BEACH BALLS IN EACH ROW AND WRITE THE TOTAL AT THE END IN THE SPACE PROVIDED



Name:

Date:

YOUBREWMYTEA.COM

# HANDWRITING

USE THE LINES BELOW TO WRITE YOUR NAME

The page contains ten sets of horizontal lines for handwriting practice. Each set consists of a solid blue top line, a dashed red middle line, and a solid blue bottom line, providing a guide for letter height and placement.